


GEOMETRY

Fill in the blanks with the best word that describes it:-

1. A sail on a sail boat has three straight sides like a _____.
2. A 2 rupee coin looks like a _____.
3. Your maths textbook cover is in the shape of a _____.
4. The teacher has drawn a figure below for Montu on the board. Help Montu solve the following table.



NAME	GEOMETRICAL FIGURE
a) VW	
b) WY	
c) XY	

5. Classify each as ray, line and line segment and name them.

a. _____

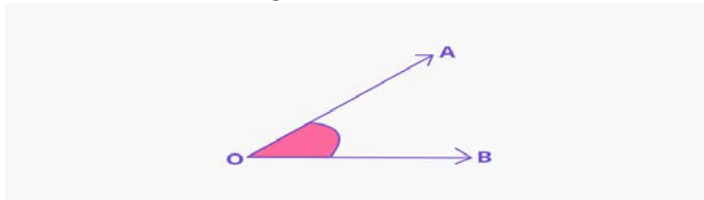
b. _____

c. _____

6. State True or False:-

- a. A ray has a definite length _____
- b. A line has two end points _____
- c. A ray has one starting point _____
- d. A line segment has no end points _____

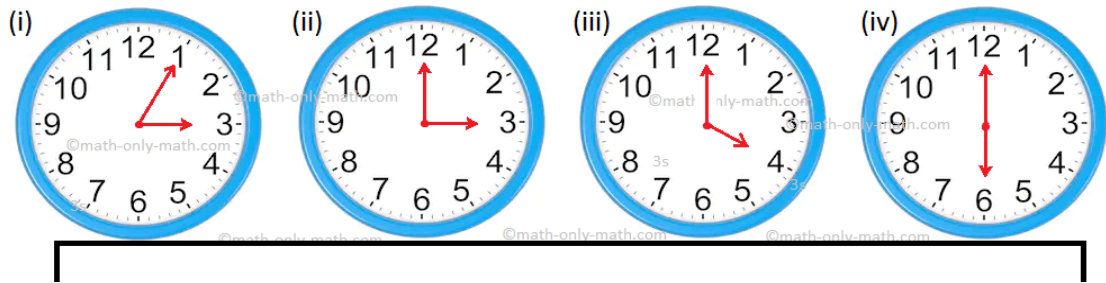
7. Name the following:-



- a. Name the vertex _____
- b. Name the arms of the angle _____
- c. Name the angle formed _____

8. What kind of angle is shown in each clock:-

Types of Angles



- i) _____
- ii) _____
- iii) _____
- iv) _____

ANSWERS

1. Triangle
2. Circle
3. Plane
- 4.

NAME	GEOMETRICAL FIGURE
b) VW	Line segment
d) WY	Ray
e) XY	Line

5.
 - a) Line
 - b) Ray
 - c) Line segment
6.
 - a) False
 - b) False
 - c) True
 - d) False
7.
 - a) O
 - b) AO, BO
 - c) \angle AOB, \angle BOA
8.
 - i) ACUTE ANGLE
 - ii) RIGHT ANGLE
 - iii) OBTUSE ANGLE
 - iv) STRAIGHT ANGLE

